

RI26 Example Phase 1 English Assessment (Question paper)

| Marked by | | Moderated by | | Score | /15 | P / F |
|---|---|---|------|--------------|-----|-------|
| Name: | | | | Disc number: | | |
| <p>Rules:</p> <p>You must write your name and your disc number.</p> <p>You must write your answer in the "Answer" column.</p> | | | | | | |
| No. | Question | Answer | Mark | | | |
| 1 | What question does this statement answer? The sky is blue. | | /1 | | | |
| 2 | Finish the sentence using the correct plural and word order of: kilogram/gold | I have five _____ of _____. | /1 | | | |
| 3 | Circle the word which can start with 'dis'. | <div>run</div> <div>sudden</div> <div>success</div> <div>agree</div> <div>walk</div> <div>eat</div> <div>end</div> <div>jump</div> <div>plant</div> <div>tall</div> <div>sing</div> <div>move</div> | /1 | | | |
| 4 | Underline the word which completes the sentence: I have a _____ car. | <div>swim</div> <div>drive</div> <div>quickly</div> <div>sleep</div> <div>happily</div> <div>moon</div> <div>blue</div> <div>dance</div> <div>carefully</div> <div>write</div> <div>flower</div> <div>chair</div> | /1 | | | |
| 5 | Which word comes after 'once' alphabetically? <div>myself</div> <div>second</div> <div>it</div> <div>six</div> <div>once</div> | | /1 | | | |
| 6 | Write these words in the correct order with the correct punctuation. <div>I</div> <div>on</div> <div>stage</div> <div>the</div> <div>danced</div> | | /1 | | | |
| 7 | Fill in the missing word. | There is _____ cup on the table. | /1 | | | |
| 8 | Write a word to complete the sentence. Choose from: <div>when</div> <div>or</div> <div>but</div> <div>if</div> <div>so</div> <div>because</div> | I used to visit my grandma every day _____ I was young. | /1 | | | |
| 9 | Re-write this sentence, including the correct punctuation: the dog chased the cat | | /1 | | | |
| 10 | 'a tall plant' What word does this describe? Underline your answer. | <div>seeing</div> <div>yellow</div> <div>funny</div> <div>house</div> <div>bulb</div> <div>tree</div> <div>leg</div> <div>sunray</div> <div>smallest</div> <div>bedtime</div> <div>handle</div> <div>jumped</div> | /1 | | | |
| 11 | Change the verb to fit the sentence. Write the verb only. I have [finish] my work. | | /1 | | | |
| 12 | Re-write this sentence, changing the subject to 'they'. He is writing a book. | | /1 | | | |
| 13 | Circle the word that is not part of the set. | <div>blue</div> <div>white</div> <div>yellow</div> <div>away</div> <div>pink</div> <div>green</div> <div>grey</div> <div>black</div> <div>red</div> <div>brown</div> <div>orange</div> <div>purple</div> | /1 | | | |
| 14 | What type of word is 'apple'? e.g. <i>adjective, adverb, etc.</i> | | /1 | | | |

RI26 Example Phase 1 English Assessment (Question paper)

| | | | | | | | | | | | |
|--|--|---|------|-------|-----------|------|---------|-------|------|-----|----|
| 15 | Which 3 letters should be capital letters? sunita and i went running on friday. | <table><tr><td></td><td></td><td></td></tr></table> | | | | /1 | | | | | |
| | | | | | | | | | | | |
| 16 | If you won Rs 1,000,000, how would you feel? Circle the correct answer. | <table><tr><td>sad</td><td>happy</td><td>sorrowful</td><td>blue</td></tr><tr><td>unhappy</td><td>upset</td><td>glum</td><td>low</td></tr></table> | sad | happy | sorrowful | blue | unhappy | upset | glum | low | /1 |
| sad | happy | sorrowful | blue | | | | | | | | |
| unhappy | upset | glum | low | | | | | | | | |
| 17 | Spell this word correctly: dai- period of 24 hours | | /1 | | | | | | | | |
| <p>Read the passage and answer the questions below. Write in one-word answers.</p> <p>Dear Rajesh,</p> <p>I hope you enjoyed celebrating Holi with your family last week. I had a wonderful time with mine. We ate lots of chicken, buff and vegetables. What did your family eat? I am excited to see you next Thursday at school.</p> <p>See you soon, Laxmi</p> | | | | | | | | | | | |
| 18 | Which festival did Laxmi and Rajesh celebrate recently? | | /1 | | | | | | | | |
| 19 | In addition to chicken and buff, what did Laxmi's family eat? | | /1 | | | | | | | | |
| 20 | What day of the week will Rajesh and Laxmi meet? | | /1 | | | | | | | | |

RI26 Example Phase 1 English Assessment (Answer paper)

| Marked by | | Moderated by | | Score | /15 | P / F |
|---|---|--|------|--------------|-----|-------|
| Name: | | | | Disc number: | | |
| <p>Rules:</p> <p>You must write your name and your disc number.</p> <p>You must write your answer in the "Answer" column.</p> | | | | | | |
| No. | Question | Answer | Mark | | | |
| 1 | What question does this statement answer? The sky is blue. | Is the sky blue?/What colour is the sky? | 1/1 | | | |
| 2 | Finish the sentence using the correct plural and word order of: kilogram/gold | I have five <u>kilograms</u> of <u>gold</u> . | 1/1 | | | |
| 3 | Circle the word which can start with 'dis'. | <div>run</div> <div>sudden</div> <div>success</div> <div><u>agree</u></div> <div>walk</div> <div>eat</div> <div>end</div> <div>jump</div> <div>plant</div> <div>tall</div> <div>sing</div> <div>move</div> | 1/1 | | | |
| 4 | Underline the word which completes the sentence: I have a _____ car. | <div>swim</div> <div>drive</div> <div>quickly</div> <div>sleep</div> <div>happily</div> <div>moon</div> <div><u>blue</u></div> <div>dance</div> <div>carefully</div> <div>write</div> <div>flower</div> <div>chair</div> | 1/1 | | | |
| 5 | Which word comes after 'once' alphabetically? <div>myself</div> <div>second</div> <div>it</div> <div>six</div> <div>once</div> | second | 1/1 | | | |
| 6 | Write these words in the correct order with the correct punctuation. <div>I</div> <div>on</div> <div>stage</div> <div>the</div> <div>danced</div> | I danced on the stage. | 1/1 | | | |
| 7 | Fill in the missing word. | There is <u>a (or one)</u> cup on the table. | 1/1 | | | |
| 8 | Write a word to complete the sentence. Choose from: <div>when</div> <div>or</div> <div>but</div> <div>if</div> <div>so</div> <div>because</div> | I used to visit my grandma every day <u>when</u> I was young. | 1/1 | | | |
| 9 | Re-write this sentence, including the correct punctuation: the dog chased the cat | The dog chased the cat. | 1/1 | | | |
| 10 | 'a tall plant' What word does this describe? Underline your answer. | <div>seeing</div> <div>yellow</div> <div>funny</div> <div>house</div> <div>bulb</div> <div><u>tree</u></div> <div>leg</div> <div>sunray</div> <div>smallest</div> <div>bedtime</div> <div>handle</div> <div>jumped</div> | 1/1 | | | |
| 11 | Change the verb to fit the sentence. Write the verb only. I have [finish] my work. | finished | 1/1 | | | |
| 12 | Re-write this sentence, changing the subject to 'they'. He is writing a book. | They are writing a book. | 1/1 | | | |
| 13 | Circle the word that is not part of the set. | <div>blue</div> <div>white</div> <div>yellow</div> <div><u>away</u></div> <div>pink</div> <div>green</div> <div>grey</div> <div>black</div> <div>red</div> <div>brown</div> <div>orange</div> <div>purple</div> | 1/1 | | | |

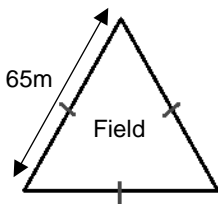
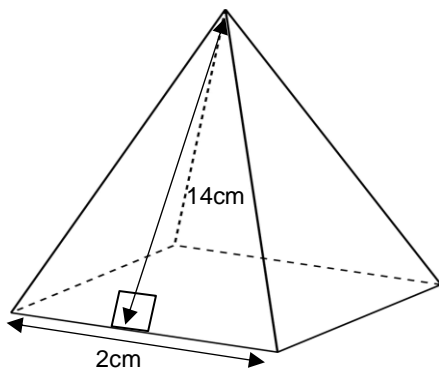
RI26 Example Phase 1 English Assessment (Answer paper)

| | | | | | | | | | | | |
|---|--|---|------|-------|-----------|------|---------|-------|------|-----|-----|
| 14 | What type of word is 'apple'? <i>e.g. adjective, adverb, etc.</i> | noun | 1/1 | | | | | | | | |
| 15 | Which 3 letters should be capital letters? sunita and i went running on friday. | <table><tr><td>S</td><td>I</td><td>S</td></tr></table> | S | I | S | 1/1 | | | | | |
| S | I | S | | | | | | | | | |
| 16 | If you won Rs 1,000,000, how would you feel? Circle the correct answer. | <table><tr><td>sad</td><td>happy</td><td>sorrowful</td><td>blue</td></tr><tr><td>unhappy</td><td>upset</td><td>glum</td><td>low</td></tr></table> | sad | happy | sorrowful | blue | unhappy | upset | glum | low | 1/1 |
| sad | happy | sorrowful | blue | | | | | | | | |
| unhappy | upset | glum | low | | | | | | | | |
| 17 | Spell this word correctly: <i>dai-</i> period of 24 hours | day | 1/1 | | | | | | | | |
| Read the passage and answer the questions below. Write in one-word answers. | | | | | | | | | | | |
| <p style="text-align: center;">Dear Rajesh,</p> <p>I hope you enjoyed celebrating Holi with your family last week. I had a wonderful time with mine. We ate lots of chicken, buff and vegetables. What did your family eat? I am excited to see you next Thursday at school.</p> <p style="text-align: center;">See you soon, Laxmi</p> | | | | | | | | | | | |
| 18 | Which festival did Laxmi and Rajesh celebrate recently? | Holi | 1/1 | | | | | | | | |
| 19 | In addition to chicken and buff, what did Laxmi's family eat? | vegetables | 1/1 | | | | | | | | |
| 20 | What day of the week will Rajesh and Laxmi meet? | Thursday | 1/1 | | | | | | | | |

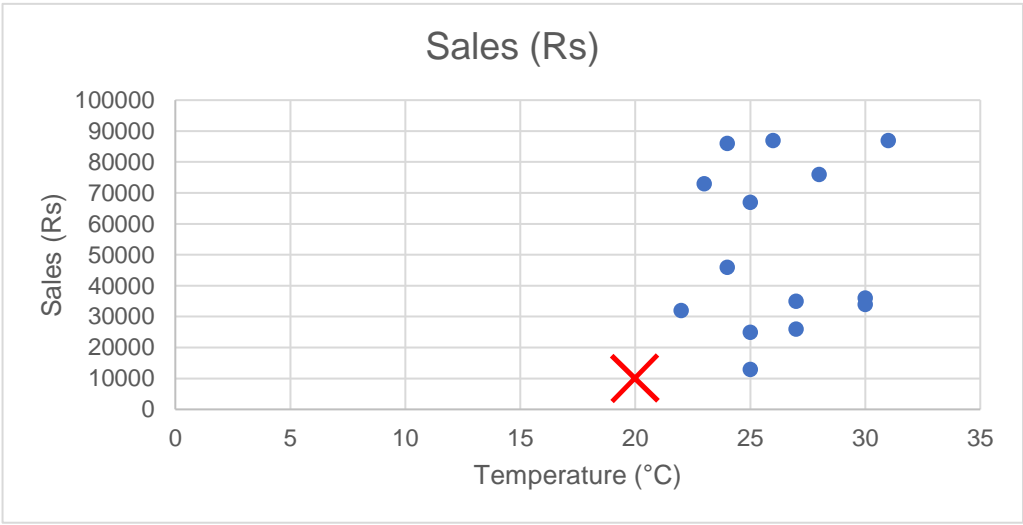
RI26 Example Phase 1 Mathematics Assessment (Question paper)

| Marked by | | Moderated by | | Score | /15 | P / F | | | | | | | |
|---|---|--|-----------|--------------|-----|--------|----|---------|----|---------|----|--|----|
| Name: | | | | Disc number: | | | | | | | | | |
| <p>Rules:</p> <p>You must write your name and your disc number.</p> <p>You must write your answer in the "Answer" column unless told otherwise.</p> <p>You must include the unit where appropriate.</p> | | | | | | | | | | | | | |
| No. | Question | Answer | Mark | | | | | | | | | | |
| 1 | <p>Aarav records the amount of food their dog eats every day for 6 months. Estimate the mean amount of daily food eaten to the nearest whole number.</p> <table border="1"> <thead> <tr> <th>Amount of food (g)</th> <th>Frequency</th> </tr> </thead> <tbody> <tr> <td>80-90</td> <td>36</td> </tr> <tr> <td>90-100</td> <td>45</td> </tr> <tr> <td>100-110</td> <td>59</td> </tr> <tr> <td>110-120</td> <td>60</td> </tr> </tbody> </table> | Amount of food (g) | Frequency | 80-90 | 36 | 90-100 | 45 | 100-110 | 59 | 110-120 | 60 | | /1 |
| Amount of food (g) | Frequency | | | | | | | | | | | | |
| 80-90 | 36 | | | | | | | | | | | | |
| 90-100 | 45 | | | | | | | | | | | | |
| 100-110 | 59 | | | | | | | | | | | | |
| 110-120 | 60 | | | | | | | | | | | | |
| 2 | Aasha aims to spend no more than 4% of their monthly income on clothes. What is their maximum monthly budget for clothes if they earn Rs21000 per month? | | /1 | | | | | | | | | | |
| 3 | If 1"=2.5cm, how many inches are in 6cm? | | /1 | | | | | | | | | | |
| 4 | Point A is (16,56), Point B is (17,65) and Point C is (20,25). If they all move right by (45) and down by (78), what are the new coordinates of Point A? | | /1 | | | | | | | | | | |
| 5 | <p>Gita owns a clothes shop. The scatter plot showses daily sales over 2 weeks against average daily temperature. On 20th July, it was 20°C and sales were Rs10000. Mark this on the scatter plot with an "x".</p> | | /1 | | | | | | | | | | |
| 6 | Which type of correlation does the scatter plot in Question 5 show? Circle your answer. | Positive Negative No correlation | /1 | | | | | | | | | | |

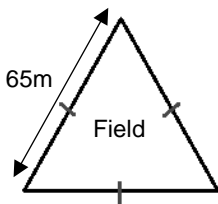
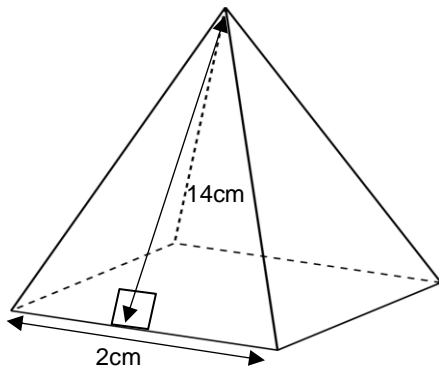
RI26 Example Phase 1 Mathematics Assessment (Question paper)

| | | | | | | | | | | | | | | | |
|----------|--|--------|-----------------------|-------------------|------------------|-------------------|------------------|----------|--------------------|------|-----------------------|-----------|-------|--|----|
| 7 | <p>Binod runs round the outside of a field 3 times. How far did they run?</p>  | | /1 | | | | | | | | | | | | |
| 8 | <p>A shop has 453.654g of sugar. Five people buy the following amounts:</p> <table border="1" data-bbox="272 506 933 566"><tr><td>7.75g</td><td>$22\frac{1}{5}$g</td><td>7.839g</td><td>0.234kg</td><td>$\frac{1}{20}$kg</td></tr></table> <p>How many grams of sugar are left in the shop?</p> | 7.75g | $22\frac{1}{5}$ g | 7.839g | 0.234kg | $\frac{1}{20}$ kg | | /1 | | | | | | | |
| 7.75g | $22\frac{1}{5}$ g | 7.839g | 0.234kg | $\frac{1}{20}$ kg | | | | | | | | | | | |
| 9 | <p>Bimala buys 26 litres of paint in total. They buy pink, red and blue paint in the ratio 4:5:6 respectively. How many litres of blue paint did they buy?</p> | | /1 | | | | | | | | | | | | |
| 10 | <p>Calculate the following: $48 \div 12(3+4)$</p> | | /1 | | | | | | | | | | | | |
| 11 | <p>What is 24.111 divided by 2.7?</p> | | /1 | | | | | | | | | | | | |
| 12 | <p>Dipesh travels 26.25 miles in 3 hours and 45 minutes. How fast did they travel? Write your answer in mph.</p> | | /1 | | | | | | | | | | | | |
| 13 | <p>This pyramid has a square base. What is the surface area of the pyramid?</p>  | | /1 | | | | | | | | | | | | |
| 14 | <p>Which is the coldest temperature? Circle your answer.</p> <table data-bbox="298 1565 1246 1695"><tr><td>29°C</td><td>-18.25 degrees C</td><td>Five°C</td><td>35°C</td><td>-47°C</td><td>minus 55 DegC</td></tr><tr><td>24 deg C</td><td>minus twenty °C</td><td>22°C</td><td>-3 degrees celcius</td><td>Eleven °C</td><td>132°C</td></tr></table> | 29°C | -18.25 degrees C | Five°C | 35°C | -47°C | minus 55 DegC | 24 deg C | minus twenty °C | 22°C | -3 degrees celcius | Eleven °C | 132°C | | /1 |
| 29°C | -18.25 degrees C | Five°C | 35°C | -47°C | minus 55 DegC | | | | | | | | | | |
| 24 deg C | minus twenty °C | 22°C | -3 degrees celcius | Eleven °C | 132°C | | | | | | | | | | |
| 15 | <p>If a hat costs Rs975 after a 35% discount, how much did the hat originally cost?</p> | | /1 | | | | | | | | | | | | |

RI26 Example Phase 1 Mathematics Assessment (Answer paper)

| Marked by | | Moderated by | | Score | /15 | P / F | | | | | | | |
|---|---|---|-----------|--------------|-----|--------|----|---------|----|---------|----|------|-----|
| Name: | | | | Disc number: | | | | | | | | | |
| <p>Rules:</p> <p>You must write your name and your disc number.</p> <p>You must write your answer in the "Answer" column unless told otherwise.</p> <p>You must include the unit where appropriate.</p> | | | | | | | | | | | | | |
| No. | Question | Answer | Mark | | | | | | | | | | |
| 1 | <p>Aarav records the amount of food their dog eats every day for 6 months. Estimate the mean amount of daily food eaten to the nearest whole number.</p> <table border="1"> <thead> <tr> <th>Amount of food (g)</th> <th>Frequency</th> </tr> </thead> <tbody> <tr> <td>80-90</td> <td>36</td> </tr> <tr> <td>90-100</td> <td>45</td> </tr> <tr> <td>100-110</td> <td>59</td> </tr> <tr> <td>110-120</td> <td>60</td> </tr> </tbody> </table> | Amount of food (g) | Frequency | 80-90 | 36 | 90-100 | 45 | 100-110 | 59 | 110-120 | 60 | 102g | 1/1 |
| Amount of food (g) | Frequency | | | | | | | | | | | | |
| 80-90 | 36 | | | | | | | | | | | | |
| 90-100 | 45 | | | | | | | | | | | | |
| 100-110 | 59 | | | | | | | | | | | | |
| 110-120 | 60 | | | | | | | | | | | | |
| 2 | Aasha aims to spend no more than 4% of their monthly income on clothes. What is their maximum monthly budget for clothes if they earn Rs21000 per month? | Rs840 | 1/1 | | | | | | | | | | |
| 3 | If 1"=2.5cm, how many inches are in 6cm? | 2.4" | 1/1 | | | | | | | | | | |
| 4 | Point A is (16,56), Point B is (17,65) and Point C is (20,25). If they all move right by (45) and down by (78), what are the new coordinates of Point A? | (61 , -22) | 1/1 | | | | | | | | | | |
| 5 | <p>Gita owns a clothes shop. The scatter plot showses daily sales over 2 weeks against average daily temperature. On 20th July, it was 20°C and sales were Rs10000. Mark this on the scatter plot with an "x".</p>  | | 1/1 | | | | | | | | | | |
| 6 | Which type of correlation does the scatter plot in Question 5 show? Circle your answer. | <div>Positive</div> <div>Negative</div> <div>No correlation</div> | 1/1 | | | | | | | | | | |

RI26 Example Phase 1 Mathematics Assessment (Answer paper)

| | | | | | | | | | | | | | | | |
|----------|---|-------------------|-----------------------|-------------------|------------------|-------------------|------------------|----------|--------------------|------|-----------------------|-----------|-------|--|-----|
| 7 | <p>Binod runs round the outside of a field 3 times. How far did they run?</p>  | 585m | 1/1 | | | | | | | | | | | | |
| 8 | <p>A shop has 453.654g of sugar. Five people buy the following amounts:</p> <table border="1" data-bbox="272 506 933 566"><tr><td>7.75g</td><td>$22\frac{1}{5}$g</td><td>7.839g</td><td>0.234kg</td><td>$\frac{1}{20}$kg</td></tr></table> <p>How many grams of sugar are left in the shop?</p> | 7.75g | $22\frac{1}{5}$ g | 7.839g | 0.234kg | $\frac{1}{20}$ kg | 131.865g | 1/1 | | | | | | | |
| 7.75g | $22\frac{1}{5}$ g | 7.839g | 0.234kg | $\frac{1}{20}$ kg | | | | | | | | | | | |
| 9 | <p>Bimala buys 26 litres of paint in total. They buy pink, red and blue paint in the ratio 4:5:6 respectively. How many litres of blue paint did they buy?</p> | 10.4litres | 1/1 | | | | | | | | | | | | |
| 10 | <p>Calculate the following: $48 \div 12(3+4)$</p> | 28 | 1/1 | | | | | | | | | | | | |
| 11 | <p>What is 24.111 divided by 2.7?</p> | 8.93 | 1/1 | | | | | | | | | | | | |
| 12 | <p>Dipesh travels 26.25 miles in 3 hours and 45 minutes. How fast did they travel? Write your answer in mph.</p> | 7mph | 1/1 | | | | | | | | | | | | |
| 13 | <p>This pyramid has a square base. What is the surface area of the pyramid?</p>  | 60cm ² | 1/1 | | | | | | | | | | | | |
| 14 | <p>Which is the coldest temperature? Circle your answer.</p> <table><tr><td>29°C</td><td>-18.25 degrees C</td><td>Five°C</td><td>35°C</td><td>-47°C</td><td>minus 55 DegC</td></tr><tr><td>24 deg C</td><td>minus twenty °C</td><td>22°C</td><td>-3 degrees celcius</td><td>Eleven °C</td><td>132°C</td></tr></table> | 29°C | -18.25 degrees C | Five°C | 35°C | -47°C | minus 55 DegC | 24 deg C | minus twenty °C | 22°C | -3 degrees celcius | Eleven °C | 132°C | | 1/1 |
| 29°C | -18.25 degrees C | Five°C | 35°C | -47°C | minus 55 DegC | | | | | | | | | | |
| 24 deg C | minus twenty °C | 22°C | -3 degrees celcius | Eleven °C | 132°C | | | | | | | | | | |
| 15 | <p>If a hat costs Rs975 after a 35% discount, how much did the hat originally cost?</p> | Rs1500 | 1/1 | | | | | | | | | | | | |